

# Kindergarten


Name: \_\_\_\_\_

Date: \_\_\_\_\_

1. Write the missing numbers

2, \_\_\_\_\_, \_\_\_\_\_, 5, \_\_\_\_\_, 7, \_\_\_\_\_, 9, \_\_\_\_\_


2. Circle 8 mice



3. Write the missing numbers

12, 10, \_\_\_\_\_, 6, \_\_\_\_\_, 2, 0

4. Count the bananas. Count the ducks. Then, write how many



\_\_\_\_\_

\_\_\_\_\_

5. Draw a square in the space below:

6. Draw a triangle in the space below:

7. Put an X on the circle. Color the triangle red. Scribble over the rectangle. Color the oval blue



8. Days of the week

How many days are there in a week? \_\_\_\_\_

If today is Monday, what day will it be in 3 days? \_\_\_\_\_ How about 6 days \_\_\_\_\_

9. How many cents are there in one dime?

- A.** 10 cents    **B.** 15 cents    **C.** 20 cents    **D.** 5

10. Peter gave 3 jelly beans to his friend James and ate 4. How many jelly beans did Peter have? \_\_\_\_\_

11. Look at the figure below.

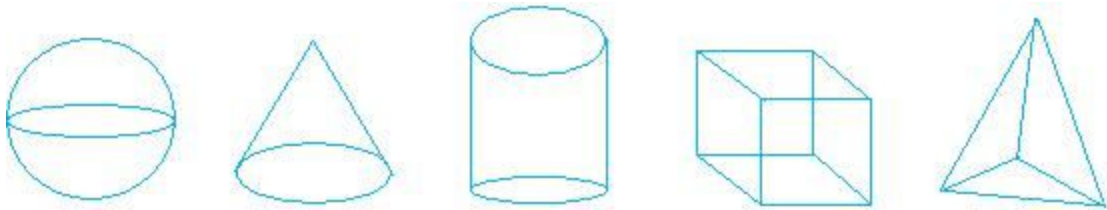
Color the cone green.

Color the sphere black

Color cube yellow

Color the cylinder blue

Color the pyramid a color of your choice



12. Look at the rectangle below.

Write L on the left side of the rectangle

Write R on the right side of the rectangle

Write an X inside the rectangle



13. Which animal is heavier? Write your answer in the space provided.

A lion or a mouse? \_\_\_\_\_

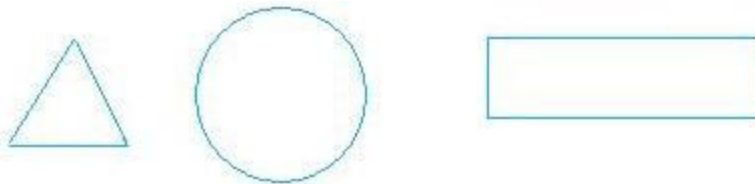
14. Which animal is taller? Write your answer in the space provided.

A horse or a giraffe? \_\_\_\_\_

15. Cross out the shape that does not belong.



16. Color half of the shapes below:



17. What is the measure of the length shown in red below?

